


Tests on Geography in Asia

Study the PPT file about Asia before answer the following sections of questions

For Free distribution to Myprivatetutor

GEOGRAPHY

ASIA



Place in the world

1. What is the largest continent in terms of both size and population?
 - A) Africa
 - B) Europe
 - C) Asia
 - D) North America
2. Approximately what percentage of the world's population lives in Asia?
 - A) 50%
 - B) 60%
 - C) 70%
 - D) 80%
3. What is the population of Asia?
 - A) 3.9 Billion
 - B) 4.78 Billion
 - C) 5.2 Billion
 - D) 4.5 Billion
4. What is the area of Asia?
 - A) 38.5 million km²
 - B) 50.4 million km²
 - C) 44.58 million km²
 - D) 42.2 million km²
5. What natural feature forms the border between Asia and Europe?
 - A) Himalayas
 - B) Ural Mountains
 - C) Caucasus Mountains
 - D) Alps

GEOGRAPHY

ASIA




Place in the world

6. What forms the border between Asia and Oceania?
- A) Bering Strait
 - B) Wallace Line
 - C) The border between Papua and Papua New Guinea
 - D) The Coral Sea

GEOGRAPHY

ASIA




Religions

1. Which religions began in the Middle East?
 - A) Hinduism and Buddhism
 - B) Christianity and Judaism
 - C) Judaism, Christianity, and Islam
 - D) Islam, Hinduism, and Buddhism
2. Which of the following religions originated in India?
 - A) Buddhism and Judaism
 - B) Hinduism and Christianity
 - C) Buddhism and Islam
 - D) Hinduism and Buddhism
3. Which are the top three religions by number of adherents?
 - A) Christianity, Hinduism, and Buddhism
 - B) Islam, Hinduism, and Buddhism
 - C) Judaism, Buddhism, and Christianity
 - D) Hinduism, Buddhism, and Judaism

GEOGRAPHY

ASIA




The people of Asia

1. What percentage of the people in Asia live in rural areas?
 - A) 45%
 - B) 50%
 - C) 58%
 - D) 60%
2. How many of the world's largest cities are located in Asia?
 - A) 5
 - B) 6
 - C) 7
 - D) 8
3. What percentage of the population in Asia lives in poverty?
 - A) 40%
 - B) 45%
 - C) 50%
 - D) 55%


GEOGRAPHY

ASIA



Asia regions and economy

1. What is the primary economic activity in North Asia, specifically Russia?
 - A) Agriculture
 - B) Textile production
 - C) Oil and gas
 - D) IT services
2. Which region in Asia is known for its industrial areas and factories?
 - A) South Asia
 - B) East Asia (China)
 - C) South East Asia
 - D) Central Asia
3. Which part of Asia is primarily focused on agriculture and is considered the poorest region?
 - A) Middle East
 - B) South Asia
 - C) South East Asia
 - D) North Asia
4. What are the main economic activities in South Asia?
 - A) Oil and gas production
 - B) Gold mining and oil
 - C) Textiles, food, IT services, and call centres
 - D) Agriculture and mining
5. Which region of Asia is described as very rich due to its oil and gas resources?
 - A) North Asia
 - B) Central Asia
 - C) Middle East
 - D) South East Asia



Asia regions and economy

6. What is Central Asia beginning to develop in terms of its economy?
- A) Factories and industrial areas
 - B) Agriculture and textiles
 - C) Gold mining and oil
 - D) IT services and call centres

GEOGRAPHY

ASIA




Physical features of Asia

1. What is the definition of a plateau?
 - A) A high land that is flat
 - B) A mountain range
 - C) A valley between hills
 - D) A low, flat area
2. Which plateau is known as the "roof of the world"?
 - A) Colorado Plateau
 - B) Deccan Plateau
 - C) Plateau of Tibet
 - D) Anatolian Plateau
3. The Himalayas stretch over how many countries?
 - A) 5
 - B) 6
 - C) 7
 - D) 8
4. What is the highest peak in the Himalayas?
 - A) K2
 - B) Kangchenjunga
 - C) Lhotse
 - D) Mount Everest
5. What mountains form part of the boundary between Asia and Europe?
 - A) Alps
 - B) Andes
 - C) Ural Mountains
 - D) Carpathian Mountains

GEOGRAPHY

ASIA



Physical features of Asia

6. Which river in China is the third longest river in the world?
 - A) Yellow River
 - B) Mekong River
 - C) Yangtze River
 - D) Ganges River

7. The Mekong River runs through China and how many other Southeast Asian countries?
 - A) 3
 - B) 4
 - C) 5
 - D) 6


8. Which river is very important to farming in Pakistan?
 - A) Ganges River
 - B) Indus River
 - C) Mekong River
 - D) Brahmaputra River

9. Which river is considered holy by Hindus and runs through India?
 - A) Brahmaputra River
 - B) Indus River
 - C) Ganges River
 - D) Yangtze River

10. What is the largest lake in the world?
 - A) Lake Baikal
 - B) Caspian Sea
 - C) Lake Superior
 - D) Lake Victoria

GEOGRAPHY

ASIA



Physical features of Asia

11. Where is the deepest lake in the world located?
 - A) United States
 - B) China
 - C) Russia
 - D) Canada

12. Which desert in the Middle East is the second largest hot desert in the world?
 - A) Sahara Desert
 - B) Gobi Desert
 - C) Arabian Desert
 - D) Thar Desert


13. The Gobi Desert is located in which countries?
 - A) China and Mongolia
 - B) India and Pakistan
 - C) Saudi Arabia and Iraq
 - D) Kazakhstan and Uzbekistan

14. How many important latitude lines run through Asia?
 - A) 2
 - B) 3
 - C) 4
 - D) 5

15. Which important latitude line runs through Russia and causes bitterly cold weather?
 - A) Equator
 - B) Tropic of Cancer
 - C) Arctic Circle
 - D) Tropic of Capricorn

GEOGRAPHY

ASIA



Physical features of Asia

16. The Tropic of Cancer causes dry weather and deserts in which regions?


- A) Russia and China
- B) Middle East, India, and Southeast Asia
- C) Japan and Korea
- D) Central Asia and Eastern Europe

17. The Equator runs through which country and causes hot and humid weather all year long?

- A) India
- B) China
- C) Indonesia
- D) Thailand

GEOGRAPHY

ASIA



Population

1. What is the definition of population density?
 - A) The total number of people in a country
 - B) The average number of people living in a place per km^2
 - C) The distribution of people across continents
 - D) The growth rate of a population
2. What does it mean if an area is densely populated?
 - A) It has a lot of people per km^2
 - B) It has few people per km^2
 - C) It is an urban area
 - D) It is a rural area
3. How do you calculate population density?
 - A) Multiply the population by the size of the country
 - B) Divide the size of the country by the population
 - C) Divide the population by the size of the country
 - D) Add the population and the size of the country
4. Given Thailand's population of 69,773,992 and area of 510,890 km^2 , what is its population density?
 - A) 120 people/ km^2
 - B) 137 people/ km^2
 - C) 145 people/ km^2
 - D) 150 people/ km^2
5. What is the population density in Asia?
 - A) 130 people/ km^2
 - B) 140 people/ km^2
 - C) 150 people/ km^2
 - D) 160 people/ km^2

GEOGRAPHY

ASIA



Population

6. Where do most Asians live?
 - A) In the north of Asia
 - B) In the south of Asia
 - C) In the west of Asia
 - D) In the east of Asia

7. Why is Russia sparsely populated?
 - A) Due to high altitudes
 - B) Because of the cold
 - C) Due to lack of resources
 - D) Because of frequent earthquakes

8. Where do most Russians live?
 - A) In the Asian part of Russia
 - B) In the southern part of Russia
 - C) In the European part of Russia
 - D) In the western part of Russia

9. Where are most of India's big cities located?
 - A) On the southern border
 - B) On the eastern coast
 - C) In a strip on the northern border
 - D) In the western region

10. Where are most of China's big cities located?
 - A) In the west
 - B) In the north
 - C) In the east or on the coast
 - D) In the south

GEOGRAPHY

ASIA



Population

11. What percentage of the world's population lives in China and India?
 - A) 36%
 - B) 40%
 - C) 44%
 - D) 50%

12. Which city is the most densely populated on earth?
 - A) Tokyo, Japan
 - B) Beijing, China
 - C) Manilla, Philippines
 - D) Mumbai, India

13. Which city has the largest population in the world?
 - A) Shanghai, China
 - B) Tokyo, Japan
 - C) Delhi, India
 - D) São Paulo, Brazil


14. Which country has the largest population?
 - A) China
 - B) India
 - C) Indonesia
 - D) Pakistan

15. What is the population of India?
 - A) 1.428 billion
 - B) 1.429 billion
 - C) 1.430 billion
 - D) 1.431 billion




Biomes

1. Which biome is characterized by extremely cold temperatures and low plants that grow during the summer when the ice melts?
 - A) Taiga
 - B) Steppe
 - C) Tundra
 - D) Mountain biome
2. Which biome is located just below the tundra and has long, very cold winters and short, warm, wet summers?
 - A) Steppe
 - B) Temperate forest biome
 - C) Taiga
 - D) Hot desert
3. Which biome is found in the middle of Asia, with very cold winters and hot summers, and is primarily grassland with few trees?
 - A) Tundra
 - B) Steppe
 - C) Taiga
 - D) Cold desert
4. What type of trees are found in the temperate forest biome?
 - A) Coniferous trees
 - B) Palm trees
 - C) Deciduous trees
 - D) No trees
5. Which biome has extremely cold winters, hot days, and very cold nights in the summer, and is very dry with no plants?
 - A) Tundra
 - B) Taiga
 - C) Cold desert



Biomes

1. Which biome is characterized by extremely cold temperatures and low plants that grow during the summer when the ice melts?
 - A) Taiga
 - B) Steppe
 - C) Tundra
 - D) Mountain biome
2. Which biome is located just below the tundra and has long, very cold winters and short, warm, wet summers?
 - A) Steppe
 - B) Temperate forest biome
 - C) Taiga
 - D) Hot desert
3. Which biome is found in the middle of Asia, with very cold winters and hot summers, and is primarily grassland with few trees?
 - A) Tundra
 - B) Steppe
 - C) Taiga
 - D) Cold desert
4. What type of trees are found in the temperate forest biome?
 - A) Coniferous trees
 - B) Palm trees
 - C) Deciduous trees
 - D) No trees
5. Which biome has extremely cold winters, hot days, and very cold nights in the summer, and is very dry with no plants?
 - A) Tundra
 - B) Taiga
 - C) Cold desert



Biomes

1. Which biome is characterized by extremely cold temperatures and low plants that grow during the summer when the ice melts?
 - A) Taiga
 - B) Steppe
 - C) Tundra
 - D) Mountain biome
2. Which biome is located just below the tundra and has long, very cold winters and short, warm, wet summers?
 - A) Steppe
 - B) Temperate forest biome
 - C) Taiga
 - D) Hot desert
3. Which biome is found in the middle of Asia, with very cold winters and hot summers, and is primarily grassland with few trees?
 - A) Tundra
 - B) Steppe
 - C) Taiga
 - D) Cold desert
4. What type of trees are found in the temperate forest biome?
 - A) Coniferous trees
 - B) Palm trees
 - C) Deciduous trees
 - D) No trees


GEOGRAPHY

ASIA



Biomes

5. Which biome has extremely cold winters, hot days, and very cold nights in the summer, and is very dry with no plants?
- A) Tundra
 - B) Taiga
 - C) Cold desert
 - D) Warm, moist forest
6. The Gobi Desert is an example of which type of biome?
- A) Cold desert
 - B) Hot desert
 - C) Steppe
 - D) Mountain biome
7. Which biome is characterized by very hot days all year round, cold nights, very dry conditions, and no plants?
- A) Taiga
 - B) Hot desert
 - C) Steppe
 - D) Temperate forest biome
8. The Arabian Desert is an example of which type of biome?
- A) Cold desert
 - B) Hot desert
 - C) Steppe
 - D) Warm, moist forest




Biomes

9. In which biome does the temperature decrease as you go higher, making it too cold for trees above a certain elevation?

- A) Tundra
- B) Taiga
- C) Mountain biome
- D) Temperate forest biome

10. Which biome is found in the south, in and near the Tropics, with warm temperatures all year long and a rainy season that results in thick tropical forests?

- A) Cold desert
- B) Tundra
- C) Taiga
- D) Warm, moist forest



Countries and cities of Asia

1. Which of the following is not one of the top 5 richest countries in Asia?
 - A) Qatar
 - B) India
 - C) Singapore
 - D) UAE
2. Borneo is divided between which three countries?
 - A) Malaysia, Thailand, and Singapore
 - B) Malaysia, Indonesia, and Brunei
 - C) Indonesia, Singapore, and Philippines
 - D) Brunei, Thailand, and Vietnam
3. How many countries are partly in Asia and Europe?
 - A) 3
 - B) 4
 - C) 5
 - D) 6
4. How many countries are there in Asia?
 - A) 46
 - B) 47
 - C) 48
 - D) 49
5. Approximately how many people do China and India together have?
 - A) 1.2 billion
 - B) 2 billion
 - C) 2.5 billion
 - D) 2.9 billion



Countries and cities of Asia

6. Which two countries are the smallest in Asia?

- A) Maldives and Sri Lanka
- B) Singapore and Maldives
- C) Bhutan and Maldives
- D) Singapore and Bhutan

7. Which part of Asia (country) forms part of the Arctic circle?

- A) Japan
- B) Russia
- C) China
- D) India

8. Through which country does the equator run?


- A) China
- B) India
- C) Indonesia
- D) Philippines

9. Which country is the largest in Asia?

- A) India
- B) China
- C) Russia
- D) Japan

GEOGRAPHY

ASIA



Answer Key

Place in the world

1. C) Asia
2. B) 60%
3. B) 4.78 Billion
4. C) 44.58 million km²
5. B) Ural Mountains
6. C) The border between Papua and Papua New Guinea

Religions

1. C) Judaism, Christianity, and Islam
2. D) Hinduism and Buddhism
3. B) Islam, Hinduism, and Buddhism

The people of Asia


1. C) 58%
2. C) 7
3. C) 50%

Asia regions and economy

1. C) Oil and gas
2. B) East Asia (China)
3. B) South Asia
4. C) Textiles, food, IT services, and call centres
5. C) Middle East
6. C) Gold mining and oil

Physical features of Asia

1. A) A high land that is flat
2. C) Plateau of Tibet
3. C) 7
4. D) Mount Everest
5. C) Ural Mountains
6. C) Yangtze River
7. C) 5
8. B) Indus River
9. C) Ganges River



Answer Key

Place in the world

1. C) Asia
2. B) 60%
3. B) 4.78 Billion
4. C) 44.58 million km²
5. B) Ural Mountains
6. C) The border between Papua and Papua New Guinea

Religions


1. C) Judaism, Christianity, and Islam
2. D) Hinduism and Buddhism
3. B) Islam, Hinduism, and Buddhism

The people of Asia

1. C) 58%
2. C) 7
3. C) 50%

Asia regions and economy

1. C) Oil and gas
2. B) East Asia (China)
3. B) South Asia
4. C) Textiles, food, IT services, and call centres
5. C) Middle East
6. C) Gold mining and oil




Answer Key

Physical features of Asia

1. A) A high land that is flat
2. C) Plateau of Tibet
3. C) 7
4. D) Mount Everest
5. C) Ural Mountains
6. C) Yangtze River
7. C) 5
8. B) Indus River
9. C) Ganges River
10. B) Caspian Sea
11. C) Russia
12. C) Arabian Desert
13. A) China and Mongolia
14. B) 3
15. C) Arctic Circle
16. B) Middle East, India, and Southeast Asia
17. C) Indonesia

Population

1. B) The average number of people living in a place per km²
2. A) It has a lot of people per km²
3. C) Divide the population by the size of the country
4. B) 137 people/km²
5. C) 150 people/km²
6. B) In the south of Asia
7. B) Because of the cold
8. C) In the European part of Russia
9. C) In a strip on the northern border
10. C) In the east or on the coast



Answer Key

Population (continue)

- 11. A) 36%
- 12. C) Manila, Philippines
- 13. B) Tokyo, Japan
- 14. B) India
- 15. B) 1.429 billion

Biomes

- 1. C) Tundra
- 2. C) Taiga
- 3. B) Steppe
- 4. C) Deciduous trees
- 5. C) Cold desert
- 6. A) Cold desert
- 7. B) Hot desert
- 8. B) Hot desert
- 9. C) Mountain biome
- 10. D) Warm, moist forest

Countries and cities of Asia

- 1. B) India
- 2. B) Malaysia, Indonesia, and Brunei
- 3. C) 5
- 4. D) 49
- 5. D) 2.9 billion
- 6. B) Singapore and Maldives
- 7. B) Russia
- 8. C) Indonesia
- 9. C) Russia